


Name \_\_\_\_\_

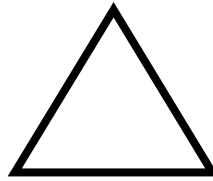
Drawing Shapes Above and Below With Directions




rectangle



circle



triangle



diamond

1. Draw 2 circles and 1 triangle **below** 2 rectangles.

2. Draw a diamond and a triangle **above** 2 circles.

3. Draw a circle and 3 rectangles **below** a triangle.

