



Name _____

How many are there in each group?


Write the number in the box




A group of 18 pumpkins arranged in a grid-like pattern. There are 5 rows: the first three rows have 3 pumpkins each, the fourth row has 2 pumpkins, and the fifth row has 1 pumpkin. A small empty box is located at the bottom right of the group.



A group of 18 apples arranged in a grid-like pattern. There are 5 rows: the first three rows have 4 apples each, the fourth row has 3 apples, and the fifth row has 1 apple. A small empty box is located at the bottom right of the group.



A group of 20 leaves arranged in a grid-like pattern. There are 5 rows, each containing 4 leaves. A small empty box is located at the bottom right of the group.



A group of 20 dice arranged in a grid-like pattern. There are 5 rows: the first row has 6 dice, the second row has 5 dice, the third row has 5 dice, the fourth row has 3 dice, and the fifth row has 1 die. A small empty box is located at the bottom right of the group.

