

Name \_\_\_\_\_

Date \_\_\_\_\_

### Ten Frames Addition Problems

Use the ten frame boxes to solve the problems. Write a number sentence to match the answer.

Sally has 5 coins. Sally needs 12 coins to buy the doll she wants. How many more coins does Sally need to buy her doll?



---

Tommie collected 8 stones. Tommie's mother gave him 4 more stones. How many stones does Tommie have now?



---



Name \_\_\_\_\_

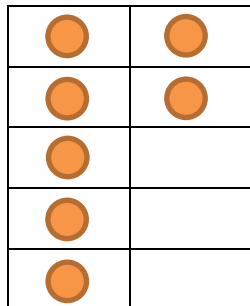
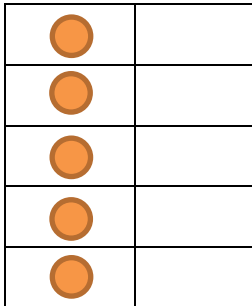
Date \_\_\_\_\_

### Ten Frames Addition Problems

#### Answer Key

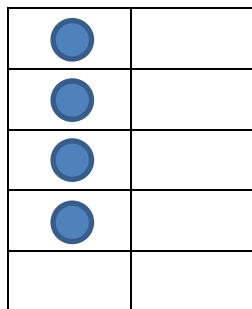
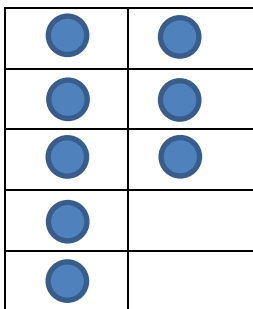
Use the ten frame boxes to solve the problems. Write a number sentence to match the answer.

Sally has 5 coins. Sally needs 12 coins to buy the doll she wants. How many more coins does Sally need to buy her doll?



Sally needs seven more coins to buy her doll.

Tommie collected 8 stones. Tommie's mother gave him 4 more stones. How many stones does Tommie have now?



Tommie has 14 stones in all.

