


Name _____


Date _____

Partition Circles into Two and Four Equal Shares

Draw a line through the circle to make two equal halves.



Draw lines through the circle to make four equal quarters.

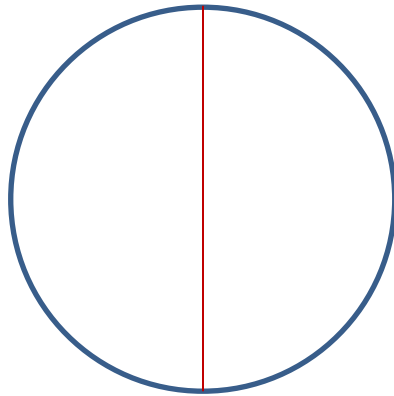


Name _____

Date _____

Partition Circles into Two and Four Equal Shares

Draw a line through the circle to make two equal halves.



Draw lines through the circle to make four equal quarters.

