


Name _____


Date _____

Grade 1 Fraction Rectangles

Fill in the blanks using the words halves, fourths, and quarters.



This rectangle is divided into _____.



This rectangle is divided into _____ or _____.

If a rectangle is divided into halves, it has ____ equal parts.

If a rectangle is divided into fourths, it has ____ equal parts.

If a rectangle is divided into quarters, it has ____ equal parts.




Name _____

Date _____

Grade 1 Fraction Rectangles

Answer Key

Fill in the blanks using the words halves, fourths, and quarters.



This rectangle is divided into **halves**.



This rectangle is divided into **fourths** or **quarters**.

If a rectangle is divided into halves, it has **2** equal parts.

If a rectangle is divided into fourths, it has **4** equal parts.

If a rectangle is divided into quarters, it has **4** equal parts.

