






## Adding: Making Groups

In this worksheet, we will practice finding and counting groups of ten.

For example, circle the groups of ten below.



How many groups of ten are there? **1**



### Exercise Questions:

*Use the picture above for questions 1-5.*

1. Circle all of the groups that have 10 Ones.
2. How many groups have 10? \_\_\_\_\_
3. How many groups have less than 10? \_\_\_\_\_
4. Write the number of objects in each group below the group.
5. Draw a star above the group with the least amount of objects.



## Answer Key

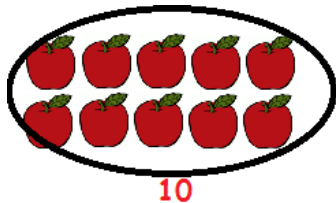
### Adding: Making Groups

In this worksheet, we will practice finding and counting groups of ten.

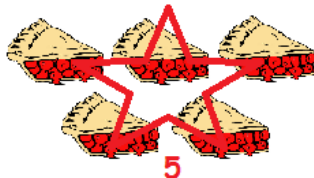
For example, circle the groups of ten below.



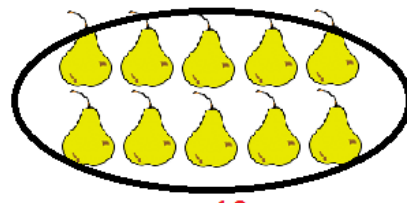
How many groups of ten are there? **1**




**10**



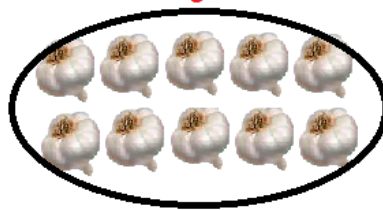
**5**



**10**



**8**




**10**



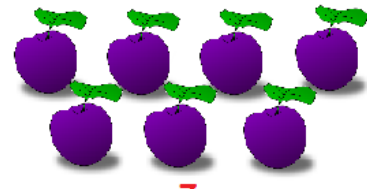
**4**



**10**



**6**



**7**

### Exercise Questions:

1. Circle all of the groups that have 10 Ones.
2. How many groups have 10? **4**
3. How many groups have less than 10? **5**
4. Write the number of objects in each group below the group.
5. Draw a star on the group with the least amount of objects.

