

Name \_\_\_\_\_

Date \_\_\_\_\_

## Shapes: 2D or 3D?

In this worksheet, we will practice identifying shapes as 2D or 3D. 2D shapes are flat, while 3D shapes are solid.

A rectangle is a 2D shape. It is flat.




A cylinder is a 3D shape. It is solid.




### Exercise Questions:

1. This shape is:



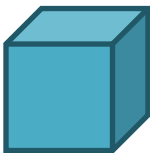
2D      3D

2. This shape is:



2D      3D

3. This shape is:



2D      3D

4. This shape is:



2D      3D

5. This shape is:



2D      3D

6. This shape is:



2D      3D

7. This shape is:



2D      3D



## Answer Key

### Shapes: 2D or 3D?

In this worksheet, we will practice identifying shapes as 2D or 3D. 2D shapes are flat, while 3D shapes are solid.

A rectangle is a 2D shape. It is flat.




A cylinder is a 3D shape. It is solid.




#### Exercise Questions:

1. This shape is:



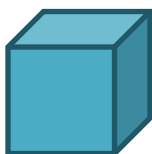
( 2D )      3D

2. This shape is:



( 2D )      3D

3. This shape is:



2D      ( 3D )

4. This shape is:



( 2D )      3D

5. This shape is:



2D      ( 3D )

6. This shape is:



2D      ( 3D )

7. This shape is:



( 2D )      3D

