


Name _____

Date _____

Classifying Objects

In this worksheet, we will practice classifying objects into categories.

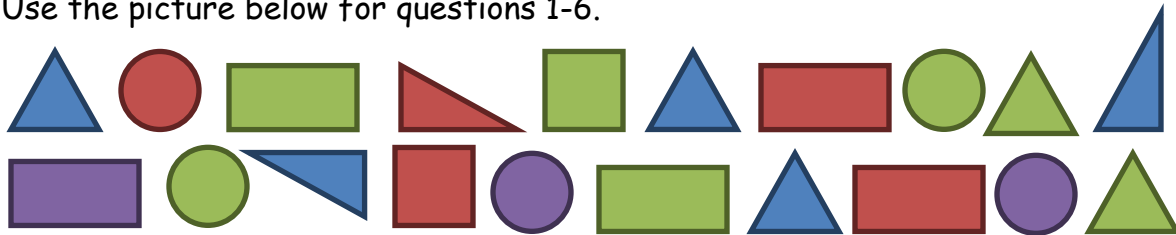
For example,



There are 3 green shapes. There are 4 blue shapes.

There are more (less) green shapes than blue shapes.

Use the picture below for questions 1-6.



Exercise Questions:

1. Count the shapes and fill in the table.

Shape Color	Number of Shapes
Blue	
Green	
Purple	
Red	

2. Count the shapes and fill in the table.

Shape Type	Number of Shapes
Circle	
Rectangle	
Square	
Triangle	

3. Which color were the most shapes?

4. Which color were the fewest shapes? _____

5. Which type of shape was there the most of? _____

6. Which type of shape was there the least of? _____




Answer Key

Classifying Objects

In this worksheet, we will practice classifying objects into categories.

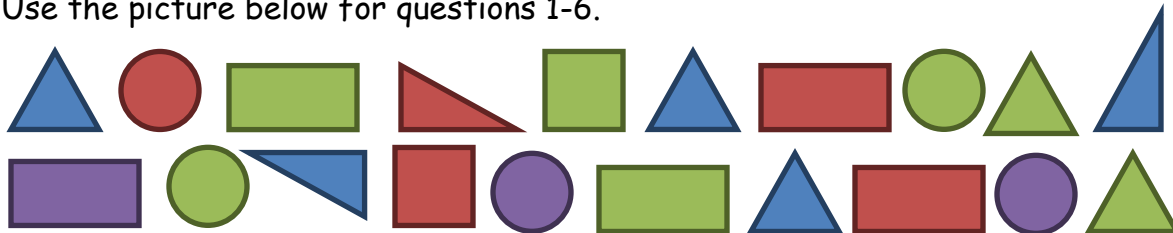
For example,



There are 3 green shapes. There are 4 blue shapes.

There are more (less) green shapes than blue shapes.

Use the picture below for questions 1-6.



Exercise Questions:

1. Count the shapes and fill in the table.

Shape Color	Number of Shapes
Blue	5
Green	7
Purple	3
Red	5

2. Count the shapes and fill in the table.

Shape Type	Number of Shapes
Circle	5
Rectangle	5
Square	2
Triangle	8

3. Which color were the most shapes?

_____ green _____

4. Which color were the fewest shapes? _____ purple _____

5. Which type of shape was there the most of? _____ triangle _____

6. Which type of shape was there the least of? _____ square _____

