

Name \_\_\_\_\_

Circle the group that has the **greater** number of objects.

Write the number for the group that has **more** objects.




More means bigger number.



\_\_\_\_\_

-----


\_\_\_\_\_



\_\_\_\_\_

-----


\_\_\_\_\_



\_\_\_\_\_

-----

\_\_\_\_\_



\_\_\_\_\_

-----

\_\_\_\_\_

