

Name _____

Date _____

Matching Landforms

In this worksheet, we will practice matching pictures of landforms to their names.
The first question is done for you.

Exercise Questions:

1. B Canyon



A.

2. _____ Cave

B.

3. _____ Continent



4. _____ Desert

F.



5. _____ Island

G.



6. _____ Mountain

C.



7. _____ Peninsula

H.




8. _____ Plain

D.



9. _____ Swamp

I.



10. _____ Valley



Name _____

Date _____



J.



Answer Key

Matching Landforms

In this worksheet, we will practice matching pictures of landforms to their names.
The first question is done for you.

Exercise Questions:

1. B Canyon



A.

2. C Cave


B.

3. J Continent




4. D Desert

F.



5. A Island

G.



6. E Mountain

C.



7. G Peninsula

H.



8. F Plain

D.



9. H Swamp

I.



10. I Valley



Answer Key

J.



Answer Key

